

Periodical Assessment Test [English Medium]

Std-3

Environment

August - 2020






Time : 1 hour

Marks - 25

(L.O.- Learning Outcome)

L.O. Identifies the leaves, twigs and stems of the surrounding tree on the basis of simple, visible features.

Q.1 Identify and connect the plants/tree leaves based on the shapes given below. (5)

	A	B
1.		1. Mango
2.		2. Asopalav
3.		3. Tulsi
4.		4. Neem
5.		5. Peepal

L.O Recognizes interactions with family and family members.

Q.2 Match the following Pairs (5)

A	B
1) Mami	1) Mummy's sister's husband
2) Kaka	2) Mummy's brother's wife
3) Masa	3) Father's father
4) Nani	4) Father's sister
5) Foi	5) Mother's mother
	6) Father's brother

L.O Makes group of different animals and birds based on their characteristics, activities, similarities and differences.

Q-3 Classify the following into animals that drink water with their tongues and drink water with lips. (5)

- 1) Snake (2) Cow (3) Goat (4) Cat (5) Dog

Animals drinking water with their tongues	Animals drinking water with their lips

L.O Describes the food needs of people of different ages, animals and birds, the availability of food and water and the use of water in and around their homes.

Q.4 In the given grid there are some places where water is found. Find any five of them and write down their name. (5)

W	A	T	E	R	F	A	L	L
E	L	A	K	E	R	P	X	Q
L	S	E	A	S	A	O	M	T
L	W	S	P	R	I	N	G	A
X	R	I	V	E	R	D	Y	P

L.O Describes the food related needs of people of different ages, animals and birds, the availability of food and water and the use of water in and around their homes.

Q.5 From which of the following the edible dishes can be prepared or cooked? (5)

Example : Sukhdi – Wheat

- 1) Bhajiya
- 2) Ladwa
- 3) Penda
- 4) Biscuit
- 5) Khichdi